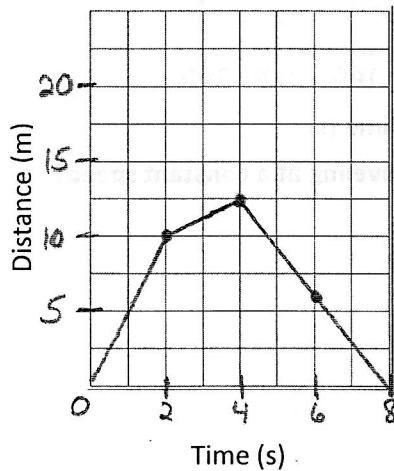


Name: \_\_\_\_\_

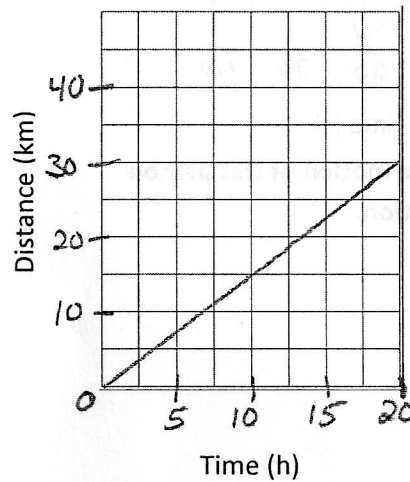
Date: \_\_\_\_\_

Hour: \_\_\_\_\_

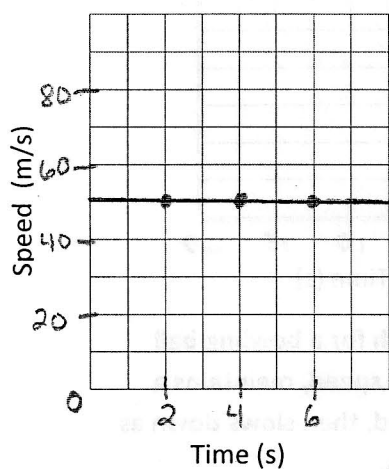
### MOTION GRAPH PRACTICE



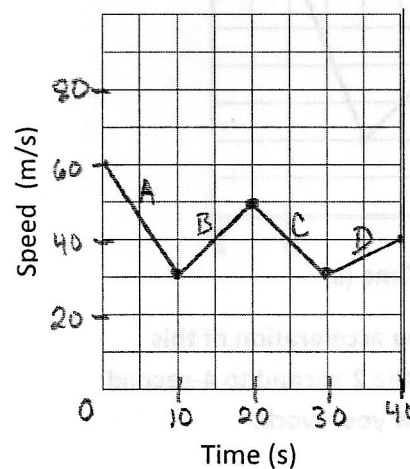
1. What is the instantaneous speed of this object at the 2-second mark?  
Show your work.



2. What is the average speed of this object?  
Show your work.



3. What is happening to this object's speed?



4. Describe this car's acceleration in each section of its graph.